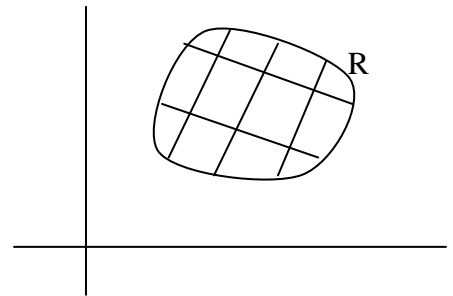


Double Integral

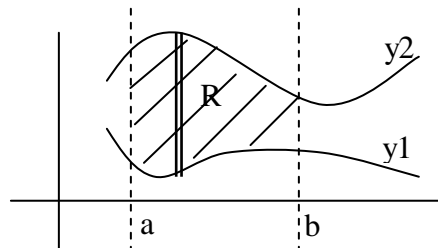
Definition: let R be closed region in the (x, y) - plane. If f is a function of two variables that is define on the region R , then the double integrals on R is written by

$$\lim_{\substack{n \rightarrow \infty \\ \Delta A_r \rightarrow 0}} \sum_{r=1}^n f(x_r, y_r) \Delta A_r = \iint_R f(x, y) dA$$



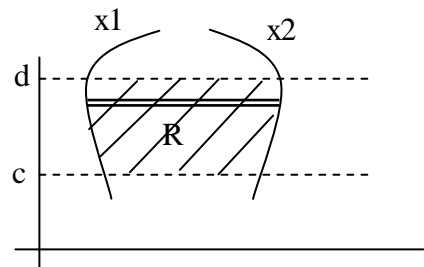
اذا كانت المنحنيات بهذه الصيغة يؤخذ المقطع شاقولي $dydx$

$$\iint_R f(x, y) dA = \int_a^b \int_{y_1}^{y_2} f(x, y) dy dx$$



اما اذا كانت المنحنيات بالشكل التالي يؤخذ المقطع افقيا $dx dy$

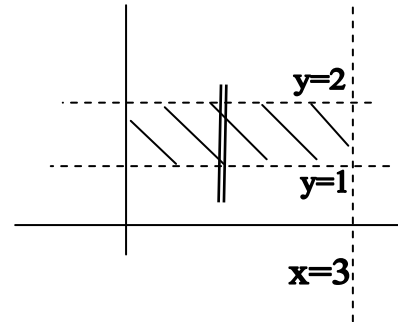
$$\iint_R f(x, y) dA = \int_c^d \int_{x_1}^{x_2} f(x, y) dx dy$$



Examples:

1) Evaluate $\int_0^3 \int_1^2 (1 + 8xy) dy dx$

i) sketch: since $dx dy \Rightarrow$ vertical
 $y=1$, $y=2$



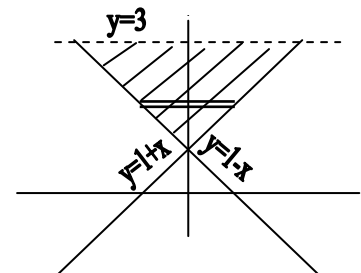
ii)

$$\begin{aligned} \int_0^3 \int_1^2 (1 + 8xy) dy dx &= \int_0^3 (y + 8x \frac{y^2}{2}) \Big|_1^2 dx \\ &= \int_0^3 \{ [2 + 4x(4)] - [1 + 4x(1)] \} dx \\ &= \int_0^3 \{ [2 + 16x] - [1 + 4x] \} dx \\ &= \int_0^3 \{ 1 + 12x \} dx \\ &= (x + 12 \frac{x^2}{2}) \Big|_0^3 \\ &= (3 + 6(9)) - (0) = (3 + 54) = 57 \end{aligned}$$

2) Evaluate $\iint_R (2x - y^2) dA$ over the triangular R enclosed by
 $y=1-x$, $y=1+x$, $y=3$

i) sketch:

$y = 1 - x$,	$y = 1 + x$
if $x = 0 \Rightarrow y = 1$,	if $x = 0 \Rightarrow y = 1$
if $y = 0 \Rightarrow x = 1$,	if $y = 0 \Rightarrow x = -1$
$\Rightarrow (0,1) \text{ \& } (1,0)$,	$\Rightarrow (0,1) \text{ \& } (-1,0)$



$$\left| \iint_R (2x - y^2) dA = \int_1^3 \int_{1-y}^{y-1} (2x - y^2) dx dy \right|$$

$$\begin{aligned} &= \int_1^3 (x^2 - y^2 x) \Big|_{1-y}^{y-1} dy = \int_1^3 \left\{ [(y-1)^2 - y^2(y-1)] - [(1-y)^2 - y^2(1-y)] \right\} dy \\ &= \int_1^3 \{ y^2 - 2y + 1 - y^3 + y^2 - 1 + 2y - y^2 + y^2 - y^3 \} dy \end{aligned}$$

$$= \int_1^3 (-2y^3 + 2y^2) dy$$

$$= \left(-2 \frac{y^4}{4} + 2 \frac{y^3}{3} \right) \Big|_1^3$$

$$= \frac{-18}{2} + 18 - \left(\frac{-1}{2} + \frac{2}{3} \right) = 18 - \frac{81}{2} + \frac{1}{2} - \frac{2}{3}$$

$$= \left| 18 - \frac{244}{6} \right|$$

3) Evaluate $\int_0^2 \int_{\frac{y}{2}}^1 e^{x^2} dx dy$

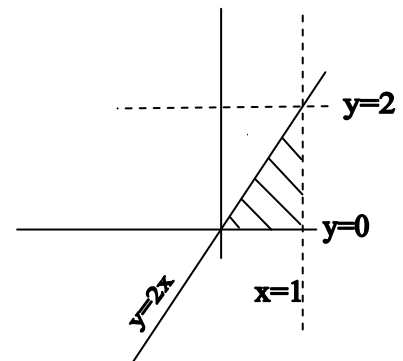
Reverse the order of integration

Since $dx dy$ horizontal

$$x = \frac{y}{2} \Rightarrow y = 2x$$

$$x = 1$$

for y from $0 \rightarrow 2$



$$\int_0^2 \int_{\frac{y}{2}}^1 e^{x^2} dx dy = \int_0^1 \int_0^{2x} e^{x^2} dy dx = \int_0^1 e^{x^2} y \Big|_0^{2x} dx$$

$$= \int_0^1 e^{x^2} (2x - 0) dx$$

$$= e^{x^2} \Big|_0^1 = e^1 - e^0 = \mathbf{e - 1}$$

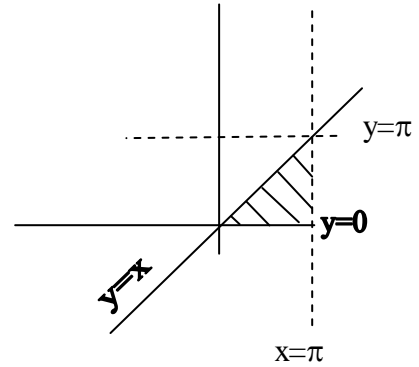
4) Evaluate $\int_0^\pi \int_y^\pi \frac{\sin x}{x} dx dy$

From left $x = y$

From right $x = \pi$

value of y , from $0 \Rightarrow x$

reverse the order



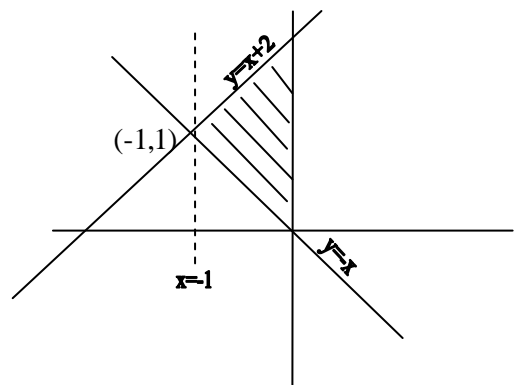
$$\begin{aligned} \Rightarrow \int_0^\pi \int_y^\pi \frac{\sin x}{x} dx dy &= \int_0^\pi \int_0^x \frac{\sin x}{x} dy dx \\ &= \int_0^\pi \frac{\sin x}{x} \cdot y \Big|_0^x dx = \int_0^\pi \frac{\sin x}{x} \cdot x dx \\ &= \int_0^\pi \sin x dx = -\cos x \Big|_0^\pi = -(-1-1) = 2 \end{aligned}$$

5)

$$\begin{aligned} \int_0^2 \int_x^2 2y^2 \sin xy dy dx &= \int_0^2 \int_0^y 2y^2 \sin xy dx dy \\ &= \int_0^2 [-2y \cos xy]_0^y dy = \int_0^2 [-2y \cos y^2 + 2y] dy \\ &= [-\sin y^2 + y^2]_0^2 = 4 - \sin 4 \end{aligned}$$

6) Write an equivalent double of integration reversed $\int_{-1}^0 \int_{-x}^{x+2} (x^2 + y^2) dy dx$

$$\begin{aligned} \int_{-1}^0 \int_{-x}^{x+2} (x^2 + y^2) dy dx \\ = \int_0^1 \int_{-y}^0 (x^2 + y^2) dx dy + \int_1^2 \int_{1-y}^0 (x^2 + y^2) dx dy \end{aligned}$$

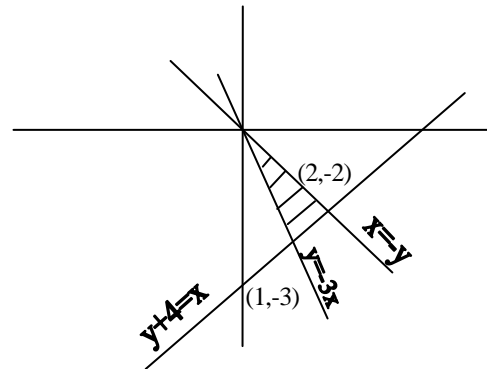


- 7) Draw the region bounded by $y=e^x$, $y=\sin x$, $x=\pi$, $x=-\pi$ and evaluate its area.

$$\begin{aligned}
 A &= \int_{-\pi}^{\pi} \int_{-\pi \sin x}^{e^x} dy dx \\
 &= \int_{-\pi}^{\pi} y \Big|_{-\pi \sin x}^{e^x} \\
 &= \int_{-\pi}^{\pi} (e^x - \sin x) dx \\
 &= e^x + \cos x \Big|_{-\pi}^{\pi} \\
 e^{\pi} - e^{-\pi} + \cos \pi - \cos(-\pi) &= e^{\pi} - e^{-\pi}
 \end{aligned}$$

- 8) Find the area bounded by $y=-x$, $y=-3x$ and $x=y+4$.

Solution:



$$\begin{aligned}
 A &= \int_{-3}^{-2} \int_{\frac{-y}{3}}^{y+4} dx dy + \int_{-2}^0 \int_{\frac{-y}{3}}^{-y} dx dy \\
 &= \int_{-3}^{-2} x \Big|_{\frac{-y}{3}}^{y+4} dy + \int_{-2}^0 x \Big|_{\frac{-y}{3}}^{-y} dy \\
 &= \int_{-3}^{-2} (y + 4 + \frac{4}{3}) dy + \int_{-2}^0 (-y + \frac{y}{3}) dy \\
 (\frac{y^2}{2} + 4y + \frac{y^2}{6}) \Big|_{-3}^{-2} + \frac{-y^2}{2} + \frac{y^2}{6} \Big|_{-2}^0 &= 2
 \end{aligned}$$

Problems

1)
$$\int_0^1 \int_0^1 \frac{x}{(xy+1)^2} dydx$$

2)
$$\int_0^{\ln 2} \int_0^1 xy e^{y^2 x} dydx$$

3)
$$\int_{\frac{\pi}{2}}^{\pi} \int_0^{x^2} \frac{1}{x} \cos \frac{y}{x} dydx$$

4)
$$\int_1^{\ln 8} \int_0^{\ln y} e^{x+y} dx dy$$

5)
$$\int_1^2 \int_x^{2x} \frac{x}{y} dydx$$

6)
$$\int_0^1 \int_0^{\pi} y \cos xy dx dy$$

7)
$$\int_0^4 \int_{\sqrt{y}}^2 e^{x^3} dx dy$$

8)
$$\int_0^{\frac{\pi}{2}} \int_0^{\sin \theta} r \cos \theta dr d\theta$$

9) Evaluate $\iint_R dA$, R: 1st quadrant bounded by $y^2 = x$ & $x^2 = y$

10) Evaluate $\iint_R xy dA$, R: the region bounded by $y^2 = x$ & $y = x$

11) Evaluate $\iint_R x(1+y^2)^{-\frac{1}{2}} dA$, R: the region in the 1st quadrant enclosed by:

$$y = x^2, y = 4, x = 0$$

12) Evaluate $\iint_R \sin(y^3) dA$, R: the region bounded by $y = \sqrt{x}$, $y = 2$ & $x = 0$

13)
$$\int_0^1 \int_y^1 x^2 e^{xy} dx dy$$

References

- 1- calculus & Analytic Geometry (Thomas).
- 2- Calculus (Howard Anton).
- 3- Advanced Mathematics for Engineering Studies (أ. رياض احمد عزت)